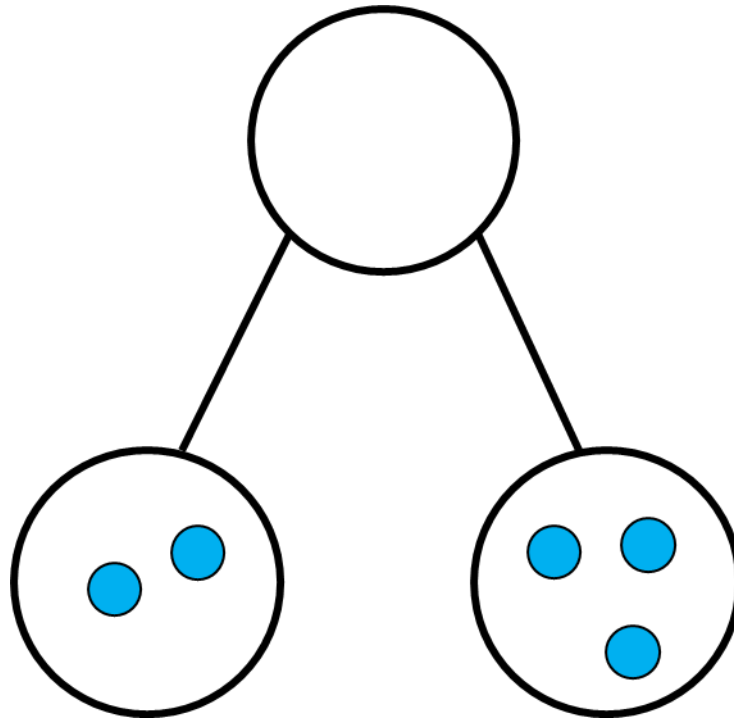
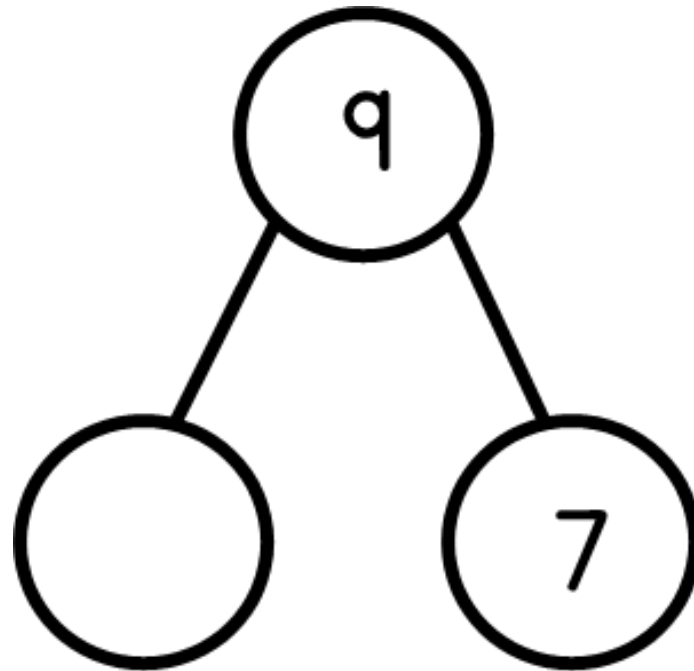


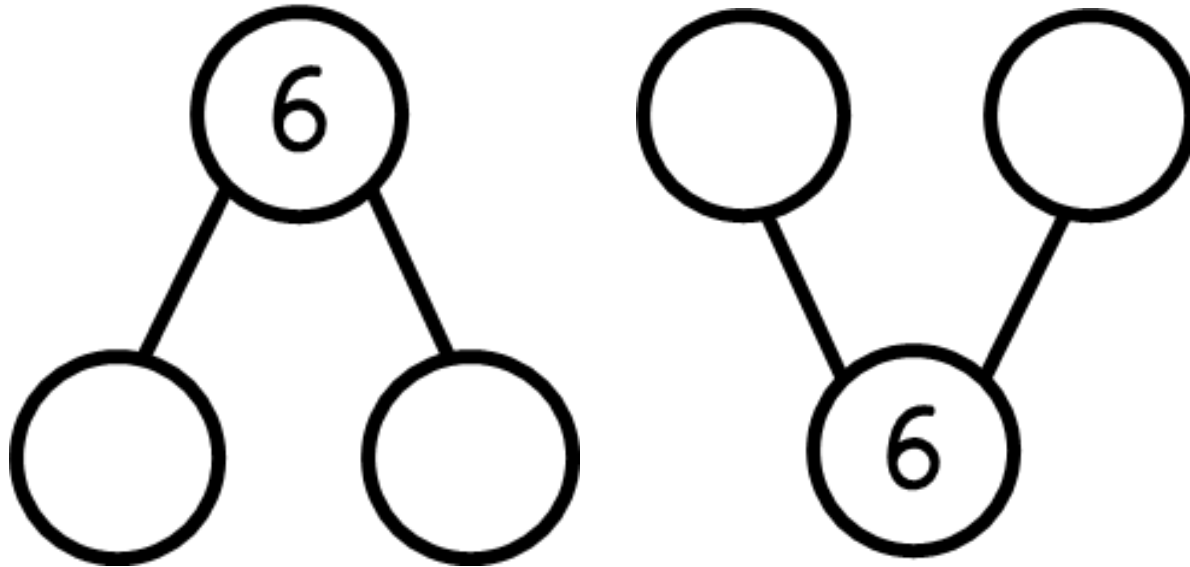
Draw circles to complete the
part-whole model.



Complete the part-whole model.



Complete the part-whole models.
Find two different ways.

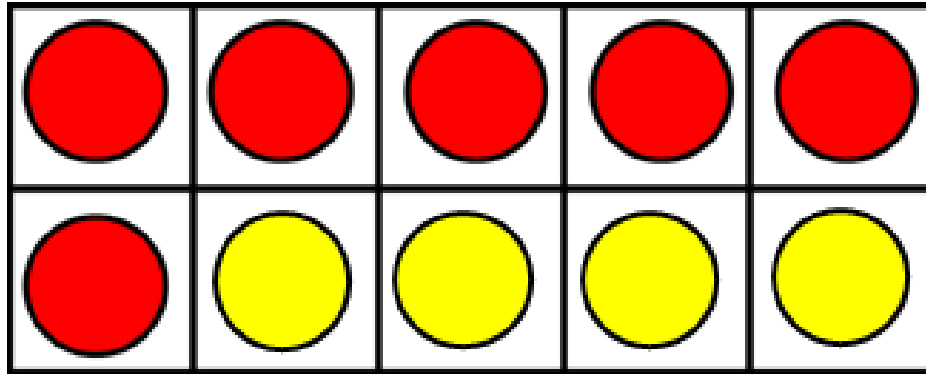


Use the picture to complete the
number sentence.



$$\boxed{7} - \boxed{} = \boxed{}$$

Complete the number sentence.



$$10 = 6 + \square$$

Jack has 6 pennies.

He spends 2 pennies.

How many pennies does he have left?



Jack has ___ pennies left.

Ted spends 10p.
Circle the 2 items he buys.



5p



3p



6p



7p

Use the picture to help you
complete these number sentences.

$$4 + 5 = \square$$

$$5 + \square = 9$$

$$\square = 4 + 5$$

$$4 = 9 - \square$$



Use $<$, $=$ or $>$ to complete these
number sentences.

$$5 + 3 \bigcirc 4 + 3$$

$$10 - 0 \bigcirc 10 - 2$$